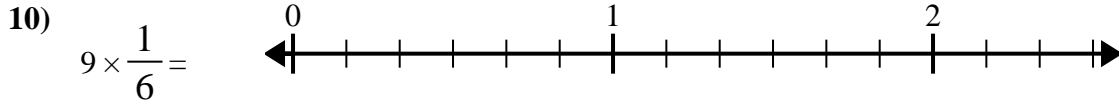
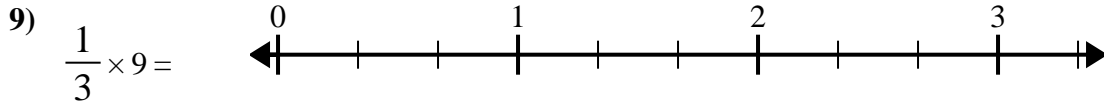
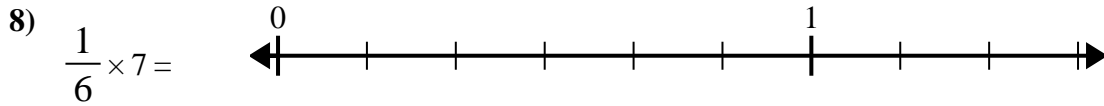
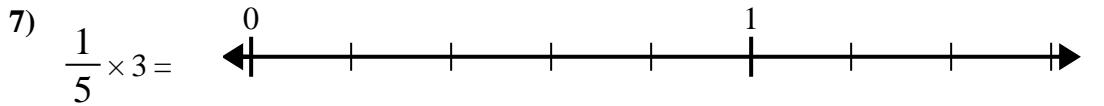
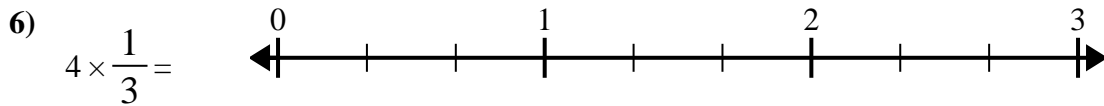
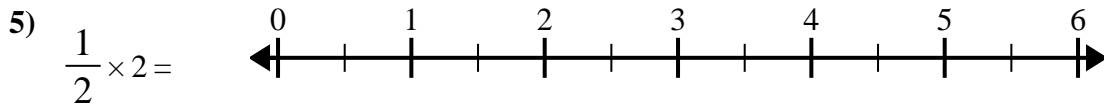
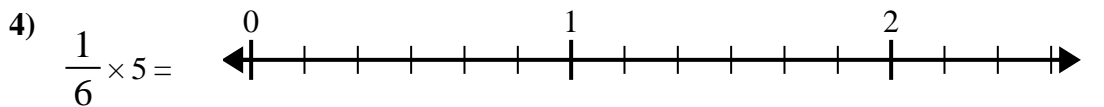
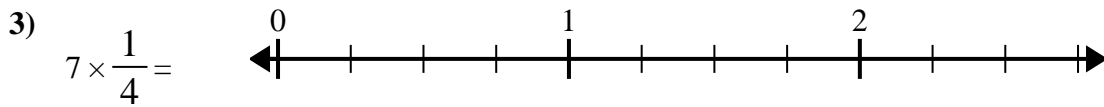
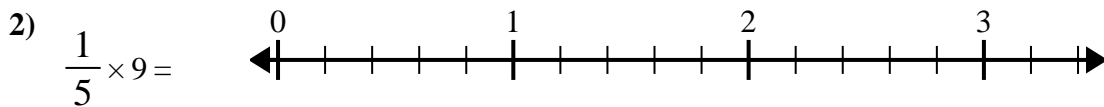
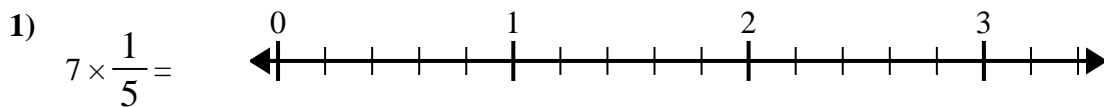




Use the numberline to solve.



**Answers**

1. \_\_\_\_\_

2. \_\_\_\_\_

3. \_\_\_\_\_

4. \_\_\_\_\_

5. \_\_\_\_\_

6. \_\_\_\_\_

7. \_\_\_\_\_

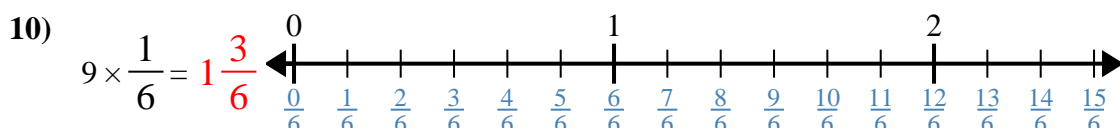
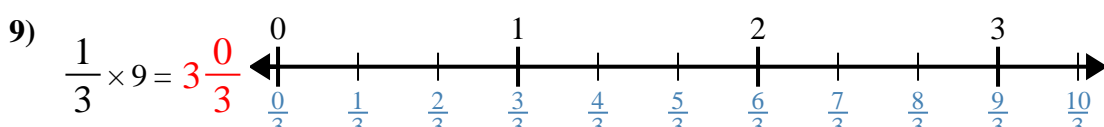
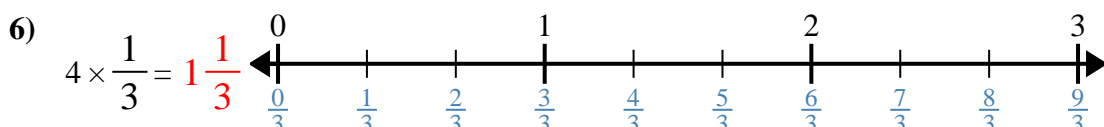
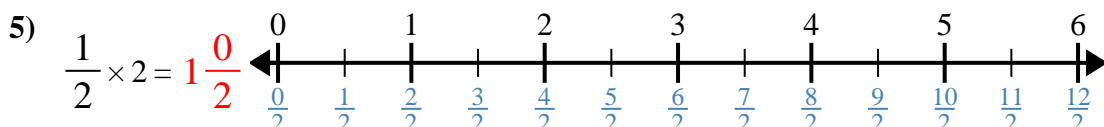
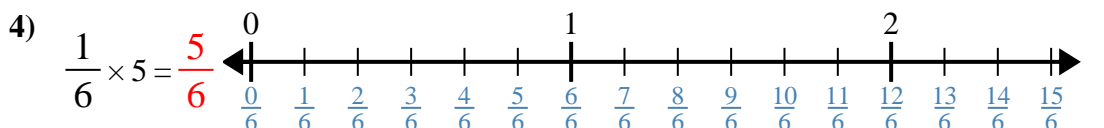
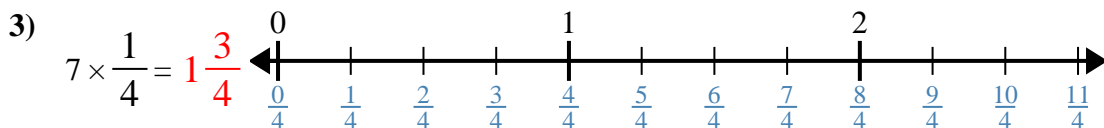
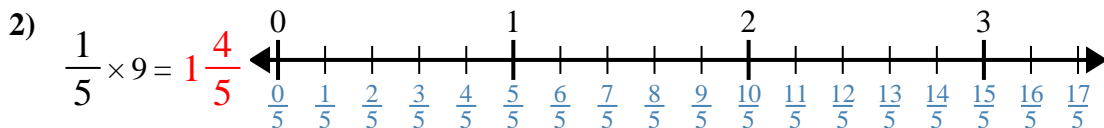
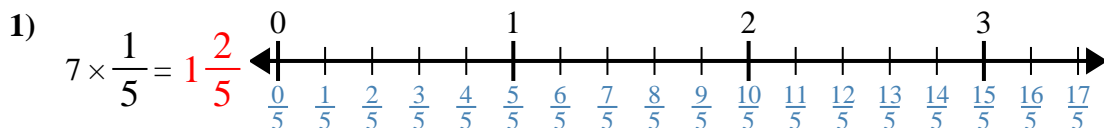
8. \_\_\_\_\_

9. \_\_\_\_\_

10. \_\_\_\_\_



Use the numberline to solve.



**Answers**

1. 1<sup>2</sup>/<sub>5</sub>
2. 1<sup>4</sup>/<sub>5</sub>
3. 1<sup>3</sup>/<sub>4</sub>
4. 5/<sub>6</sub>
5. 1<sup>0</sup>/<sub>2</sub>
6. 1<sup>1</sup>/<sub>3</sub>
7. 3/<sub>5</sub>
8. 1<sup>1</sup>/<sub>6</sub>
9. 3<sup>0</sup>/<sub>3</sub>
10. 1<sup>3</sup>/<sub>6</sub>



Use the numberline to solve.

**Answers**

$\frac{3}{5}$

$\frac{5}{6}$

$1\frac{1}{3}$

$3\frac{0}{3}$

$1\frac{1}{6}$

$1\frac{3}{4}$

$1\frac{4}{5}$

$1\frac{3}{6}$

$1\frac{2}{5}$

$1\frac{0}{2}$

1)

1. \_\_\_\_\_

2)

2. \_\_\_\_\_

3)

3. \_\_\_\_\_

4)

4. \_\_\_\_\_

5)

5. \_\_\_\_\_

6)

6. \_\_\_\_\_

7)

7. \_\_\_\_\_

8)

8. \_\_\_\_\_

9)

9. \_\_\_\_\_

10)

10. \_\_\_\_\_